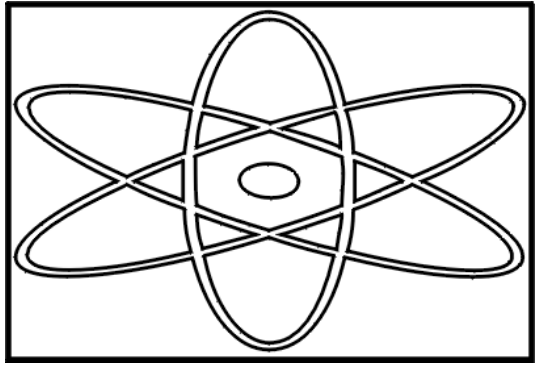


Name: _____ Date: _____

Teacher: _____ Class: _____

Addition - Review



How do you tell which end of a worm is the head? Tickle it in the middle and see which end laughs!

Complete each section.

Find the sum of each equation below.

1. $7 + 8 = 15$ 2. $4 + 9 = 13$ 3. $4 + 5 = 9$ 4. $4 + 4 = 8$ 5. $5 + 3 = 8$

6. $7 + 1 = 8$ 7. $7 + 4 = 11$ 8. $5 + 5 = 10$ 9. $6 + 1 = 7$ 10. $9 + 1 = 10$

11. $8 + 8 = 16$ 12. $1 + 1 = 2$ 13. $6 + 6 = 12$ 14. $5 + 5 = 10$ 15. $9 + 9 = 18$

16.
$$\begin{array}{r} 322 \\ + 563 \\ \hline 885 \end{array}$$

17.
$$\begin{array}{r} 773 \\ + 120 \\ \hline 893 \end{array}$$

18.
$$\begin{array}{r} 445 \\ + 152 \\ \hline 597 \end{array}$$

19.
$$\begin{array}{r} 311 \\ + 105 \\ \hline 416 \end{array}$$

20.
$$\begin{array}{r} 231 \\ + 742 \\ \hline 973 \end{array}$$

21.
$$\begin{array}{r} 747 \\ + 122 \\ \hline 869 \end{array}$$

22.
$$\begin{array}{r} 200 \\ + 495 \\ \hline 695 \end{array}$$

23.
$$\begin{array}{r} 101 \\ + 445 \\ \hline 546 \end{array}$$

24.
$$\begin{array}{r} 882 \\ + 103 \\ \hline 985 \end{array}$$

25.
$$\begin{array}{r} 251 \\ + 138 \\ \hline 389 \end{array}$$

What number should be added to the first number to make the second number?

26. $3 + 1 = 4$ 27. $3 + 6 = 9$ 28. $2 + 3 = 5$ 29. $1 + 3 = 4$ 30. $2 + 0 = 2$

31. $1 + 0 = 1$ 32. $4 + 2 = 6$ 33. $5 + 1 = 6$ 34. $2 + 4 = 6$ 35. $5 + 2 = 7$

Write a rule to represent the relationship between input and output.

36.

Input	Output
1	5
7	11
4	8
6	10

Add 4

37.

Input	Output
10	13
7	10
3	6
1	4

Add 3

38.

Input	Output
3	5
8	10
2	4
5	7

Add 2

Solve the equations across and down.

39.

5	+	6	+	9	=	20
+		+		+		+
2	+	2	+	7	=	11
+		+		+		+
7	+	5	+	5	=	17
=		=		=		=
14	+	13	+	21	=	48

40.

9	+	1	+	9	=	19
+		+		+		+
7	+	10	+	5	=	22
+		+		+		+
8	+	3	+	1	=	12
=		=		=		=
24	+	14	+	15	=	53

41.

8	+	5	+	8	=	21
+		+		+		+
8	+	2	+	5	=	15
+		+		+		+
3	+	10	+	9	=	22
=		=		=		=
19	+	17	+	22	=	58

42.

3	+	2	+	6	=	11
+		+		+		+
8	+	8	+	2	=	18
+		+		+		+
7	+	7	+	10	=	24
=		=		=		=
18	+	17	+	18	=	53

Match each equation in the column on the left with the answer from the column on the right.

43.

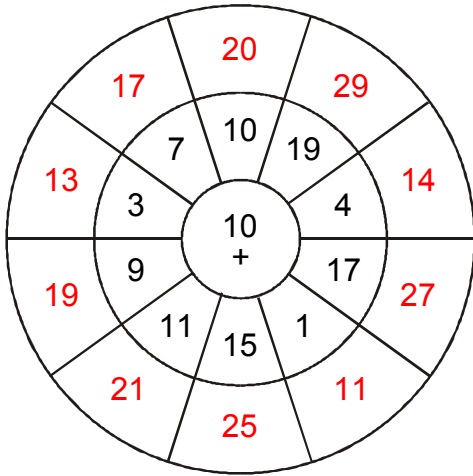
a. $20 + 6 =$ _____	B	•	•	C = 38
b. $1 + 15 =$ _____	A	•	•	D = 25
c. $20 + 18 =$ _____	C	•	•	B = 26
d. $20 + 5 =$ _____	D	•	•	E = 24
e. $16 + 8 =$ _____	E	•	•	A = 16

44.

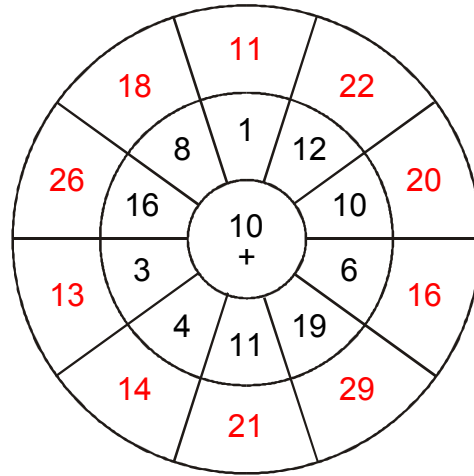
a. $6 + 18 =$ _____	B	•	•	D = 11
b. $14 + 17 =$ _____	E	•	•	B = 24
c. $18 + 9 =$ _____	C	•	•	E = 31
d. $12 + 8 =$ _____	A	•	•	C = 27
e. $4 + 7 =$ _____	D	•	•	A = 20

Add the number in the center of the circle to the number in each section around it.

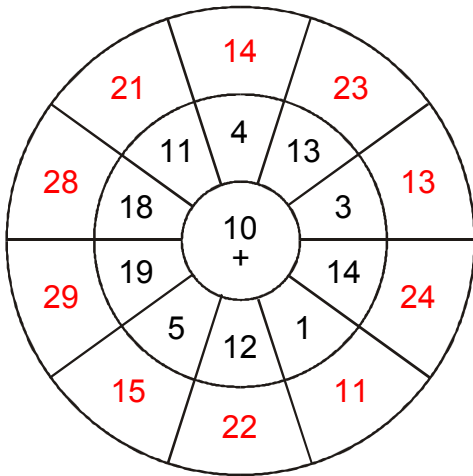
45.



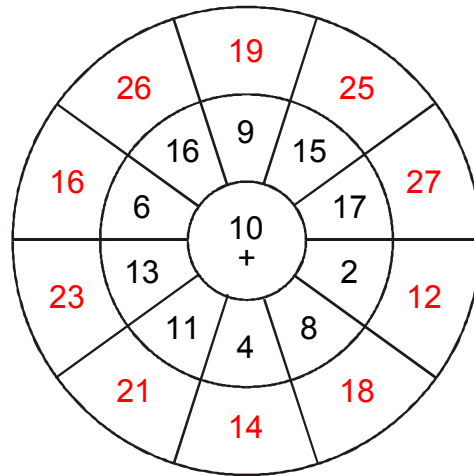
46.



47.



48.



Complete the table by adding each number on the top to each number on the side.

49.

+	1	4	8	3	6
9	10	13	17	12	15
3	4	7	11	6	9
2	3	6	10	5	8
6	7	10	14	9	12
7	8	11	15	10	13

50.

+	4	7	2	3	8
7	11	14	9	10	15
5	9	12	7	8	13
2	6	9	4	5	10
3	7	10	5	6	11
8	12	15	10	11	16